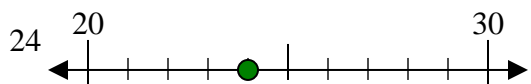




Use the numberlines to round each number to the nearest 10.

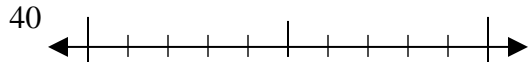
Ex)



Answers

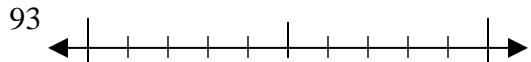
Ex. 20

1)



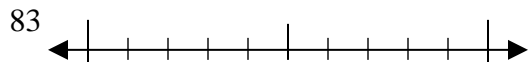
1. _____

2)



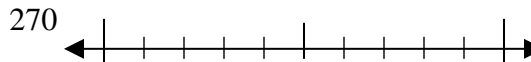
2. _____

3)



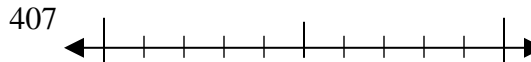
3. _____

4)



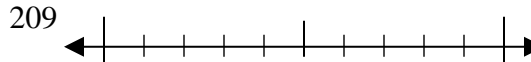
4. _____

5)



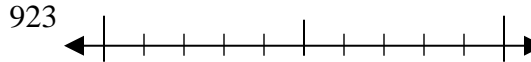
5. _____

6)



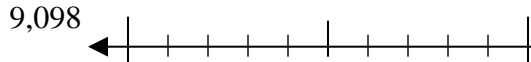
6. _____

7)



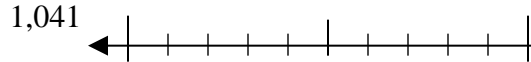
7. _____

8)



8. _____

9)

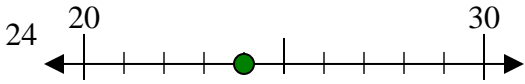


9. _____

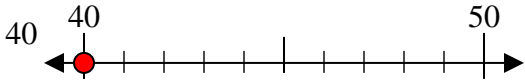


Use the numberlines to round each number to the nearest 10.

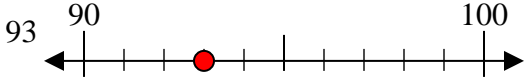
Ex)



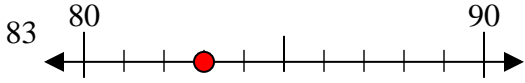
1)



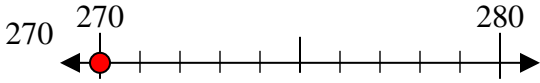
2)



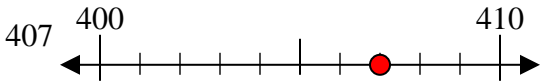
3)



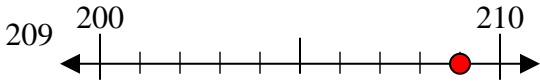
4)



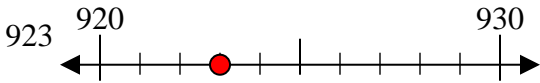
5)



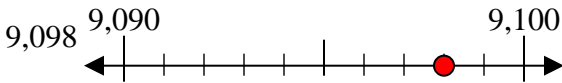
6)



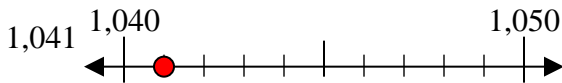
7)



8)



9)



Answers

Ex. 20

1. 40

2. 90

3. 80

4. 270

5. 410

6. 210

7. 920

8. 9100

9. 1040